

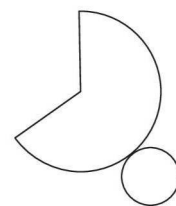
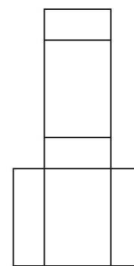
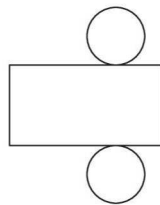
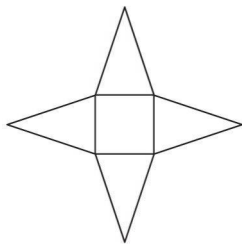
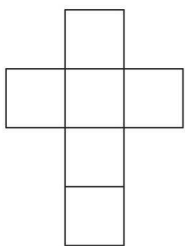
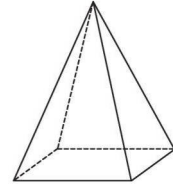
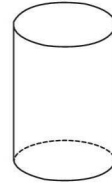
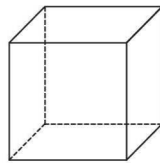
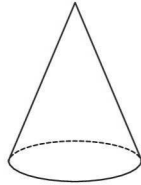
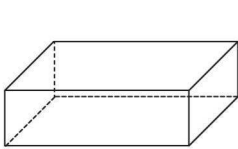
Klasse 4

Körper



Name:

① ☀ Ordne den Netzen die dazugehörigen Körper zu.



② ☀ Vervollständige die Tabelle.

Körpername	Anzahl der Flächen	Anzahl der Kanten	Anzahl der Ecken oder Spitzen
Würfel 			
Kegel 			
Zylinder 			
Quader 			
Pyramide 			