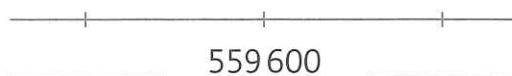
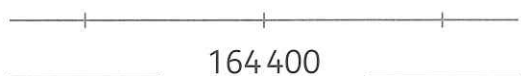
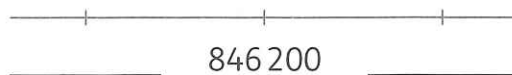
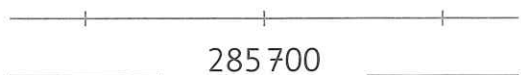
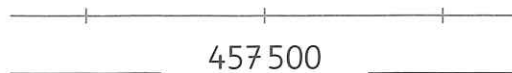
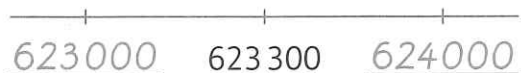
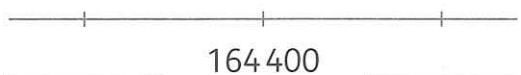
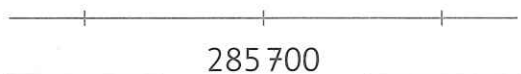
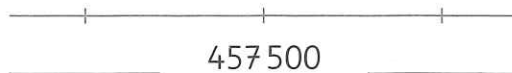
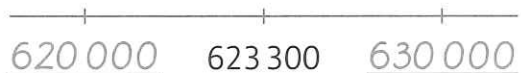


Zahlenstrahl bis 1 000 000

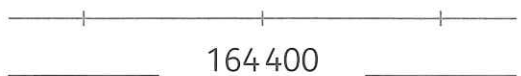
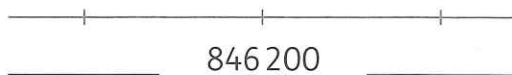
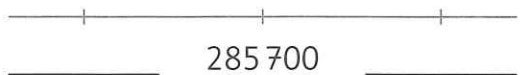
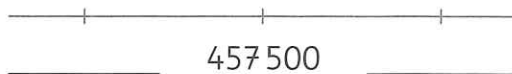
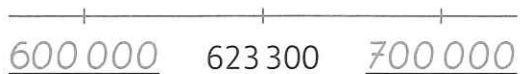
1 Trage die NT ein.



2 Trage die NZT ein.



3 Trage die NHT ein.



Forscheraufgaben

Vergleiche die Aufgaben 1 bis 3. Was fällt dir auf?

Finde die NT, NZT und NHT für die Zahlen: 507 100 und 260 900.